



















# Phones

6					
5					
4					
3					
2					
1					
	Sam	Kim	Tom	Pam	Jim

## Phones Picture Graph

The picture graph tells how many phones are in each child's house. Look at the picture graph and see if you can answer the questions.

1. How many phones does Sam have in his house? \_\_\_\_\_
2. Who has the most phones in their house?  
\_\_\_\_\_
3. Who has the least amount of phones in their house? \_\_\_\_\_
4. What has the same amount of phones?  
\_\_\_\_\_
5. Who has five phones in their house?  
\_\_\_\_\_
6. Can you come up with questions?